


Maths Challenges!!



= 10



= 5



= 2



= 4

This week's learning theme is 'Music'. I have given each musical note a value. Can you use this code to solve the following calculations?



+



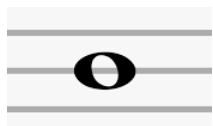
=



-



=



x



=



x



=



x



=



+




+



=

Shape and Pattern



Your challenge is to record ALL the different ways you could make a chain / necklace / pattern using the bead colours above. How many different combinations can you make? Can you work systematically so that you don't miss any out?